

O. P. JINDAL SCHOOL, SAVITRI NAGAR
Annual Examination (2022 – 2023)

Class: II

Subject: Information Technology (IT)

MM: 40

Time: 1 Hr.

Name: _____

Class/Section: _____

Roll No.: _____

Invigilator's sign: _____

Marks Obtained: _____

Examiner's sign: _____

General Instructions: All questions are compulsory.

SECTION – A

Q.1 Tick out the correct option:

(04 x 01 = 04 Marks)

- i. _____ button contains different options to work in Paint.
a. Paint b. Start c. Close d. none of these
- ii. In which group is the curve tool present ?
a. Tools b. Image c. Shape d. none of these
- iii. _____ tool is used to fill colours in a drawing.
a. Fill color b. Paint c. Fill with color d. none of these
- iv. We can select the save option by clicking on the _____ button.
a. Paint b. File c. Home d. none of these

SECTION – B

Q.2 Fill in the blanks:

(04 x 01 = 04 Marks)

[Hints: Brushes, Paint, Pencil, Tab]

- i. A _____ contains tools arranged in different groups.
- ii. The _____ tool is used to draw free-form lines or curves.
- iii. _____ tool contains the Airbrush option.
- iv. The save option is present in the _____ button.

SECTION – C

Q.3 Write True(T) or False(F):


(04 x 01 = 04 Marks)

- i. A curve can be modified only three times. _____
- ii. The Pencil tool is used to draw only straight lines. _____
- iii. The Airbrush tool is used to spray colour. _____
- iv. All the tools have similar functions. _____


SECTION – D

Q.4 Match the column-

(04 x 01 = 04 Marks)




Pencil tool



Airbrush tool



Fill with color tool



Polygon tool

SECTION – E


Q5. Answer in one word:


(02 x 01 = 02 Marks)

- i. Which tool is used to draw a polygon?

ii. Which part of the Paint window contains tools arranged in different group?

Q6. Write the names of the following tools given below: (02 x 01 = 02 Marks)

i.  _____.

ii.  _____.
